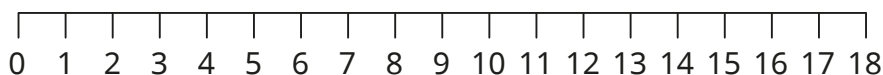


- 1** Use cubes to make 12, 7 and 15
- Which number is the smallest?
  - Which number is the greatest?
  - Write the numbers in order.  
Start with the greatest number.



- 2** a) How many tiles are there?



- b) Write the numbers of tiles in order.  
Start with the greatest number.



- 3** Order the numbers from smallest to greatest.

- 12, 8, 15
- 16, 18, 17
- 20, 13, 9
- 11, 19, 18

- 4** Order the numbers from greatest to smallest.

- 16, 7, 13
- 9, 12, 17
- 9, 20, 19
- 14, 17, 12

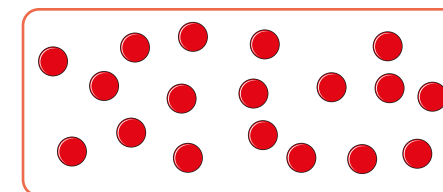

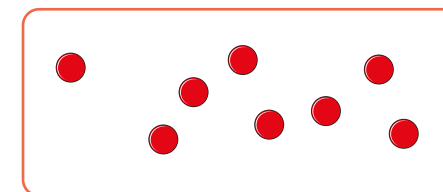
- 5** The counters are in order from smallest to greatest.  
Draw the missing counters.



smallest



greatest



Is there more than one answer?

