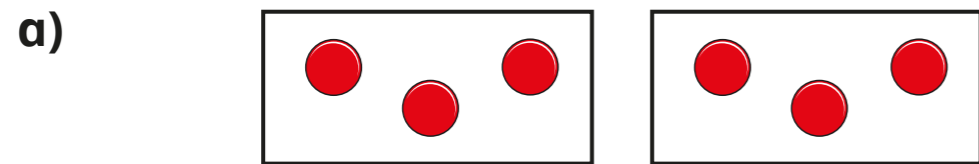


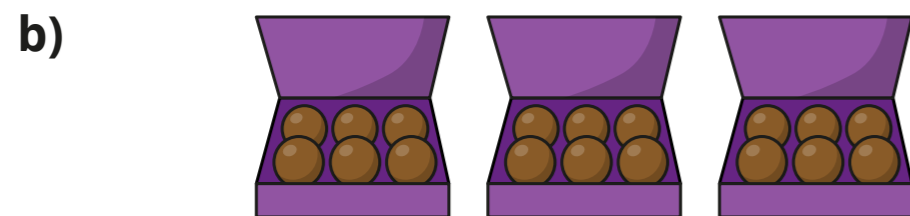
# Introduce the multiplication symbol

1 Complete the sentences to match the pictures.



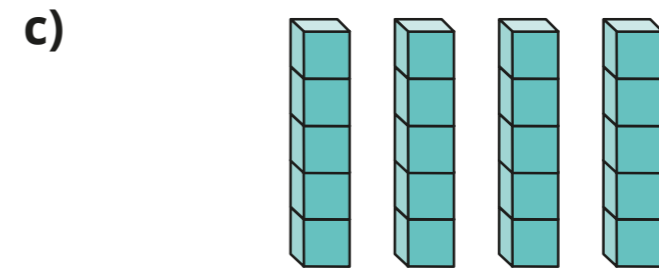
There are  equal groups with   
in each group.

+  = 6       ×  = 6



There are  equal groups with   
in each group.

+  +  = 18  
 ×  = 18



There are  equal groups

with  in each group.

+  +  +  = 20

×  = 20



There are  equal groups with   
in each group.

+  = 8

×  = 8


2 Complete the table.

The first one has been done for you.

Addition	Multiplication
$2 + 2 + 2 + 2$	$4 \times 2$
$5 + 5 + 5$	
$3 + 3 + 3 + 3 + 3$	
	$2 \times 10$

3 a) Draw a picture to match the multiplication story.

There are 3 trees with 5 birds in each tree.  
There are 15 birds altogether.



b) Write an addition sentence and a multiplication sentence to match the story.

---

---

4 The total is 16  
What could the addition and the multiplication be?

---

---

5 Use counters to help you complete the number sentences.

a)  $3 \times \square = 12$

b)  $\square \times 4 = 8$

c)  $2 \times \square = 10$

