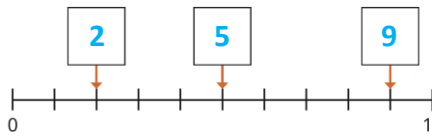
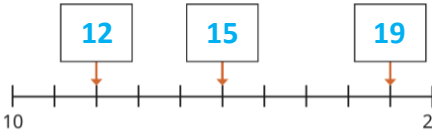
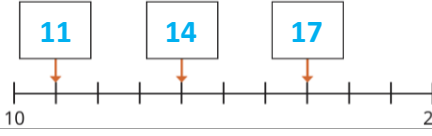
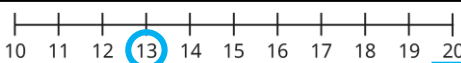
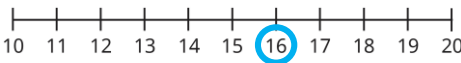
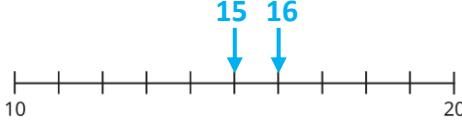


Y1 – Spring – Block 1 – Step 9 – Use a number line to 20 Answers

Question	Answer
1	<p>a) </p> <p>b) </p> <p>c) </p> <p>Count on from the start of the number line or back from the end. Children may also have noticed that 5 and 15 are the mid point and used that as a starting point.</p>
2	<p>a), b) </p> <p>c) 17, 18, 19, 20</p>
3	<p>a) </p> <p>b) 4</p> <p>c) 6</p>
4	<p></p>