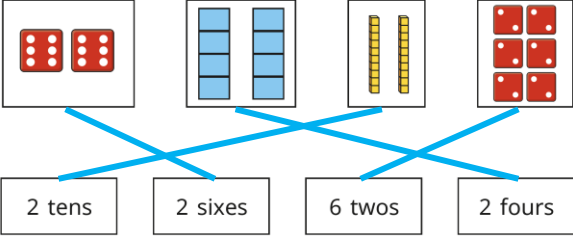





Y2 – Spring – Block 2 – Step 2 – Make equal groups Answers

Question	Answer
1	a) There are 4 equal groups of 10 There are 4 tens. b) There are 8 equal groups of 10 There are 8 tens. c) There are 6 tens.
2	a) There are 3 equal groups with 7 in each group. b) There are 5 equal groups with 3 in each group.
3	
4	
5	Take 1 apple from the third plate and add it to the first plate.
6	a)  b)  They have the same number of triangles.