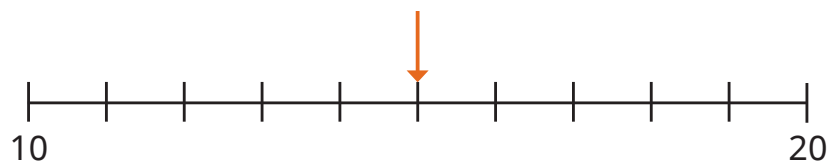
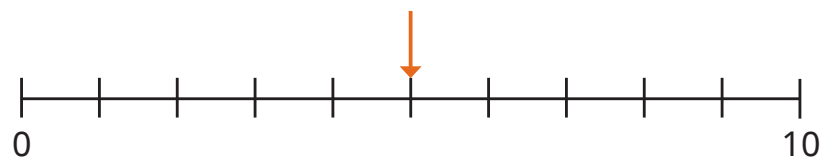
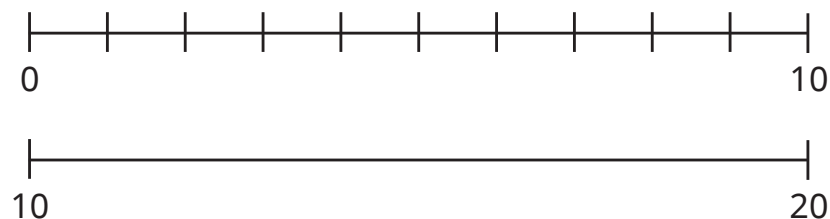


1 Here are two number lines.



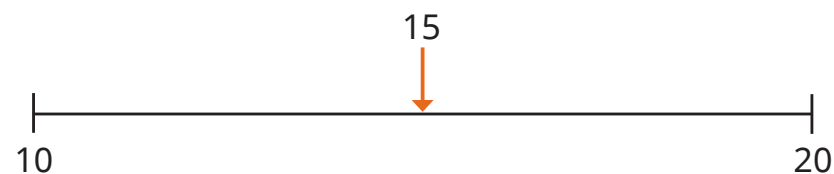
- a) What are the numbers halfway along the number lines?
- b) Write two numbers that are between 10 and 15
- c) Write two numbers that are between 15 and 20

2 Here are two number lines.



- a) What are the missing numbers on the top number line?
- b) Estimate where 16 belongs on the bottom number line.

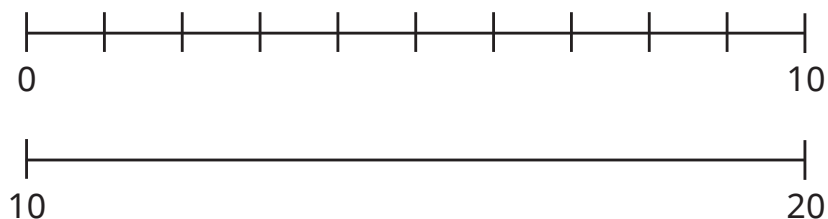
3 Here is a number line.



- a) Estimate where 12 belongs on the number line.
 - b) Estimate where 17 belongs on the number line.
- Compare answers with a partner.

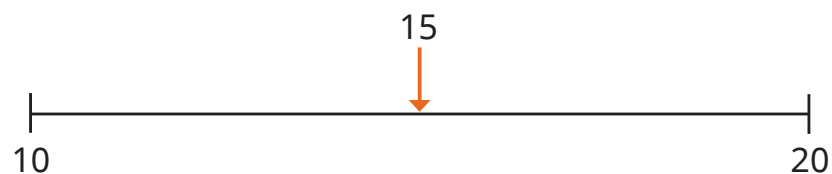


2 Here are two number lines.



- a) What are the missing numbers on the top number line?
- b) Estimate where 16 belongs on the bottom number line.

3 Here is a number line.




- a) Estimate where 12 belongs on the number line.
- b) Estimate where 17 belongs on the number line.

Compare answers with a partner.



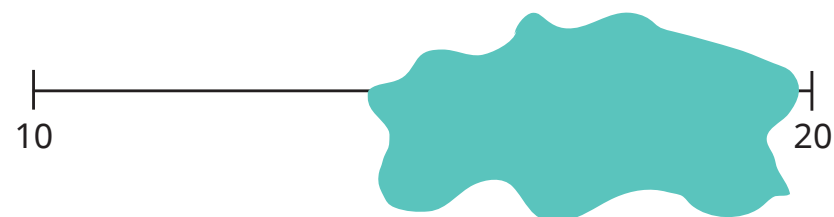
4 Estimate where 19 belongs on the number line.



Compare answers with a partner.



5 Kay labels a number on the number line. Then she spills some paint on her number.



What number could Kay have labelled?
Compare answers with a partner.

